

Subject - EVS

Set - B

M.M. - 60

Time - 3.00 hrs.

Name - \_\_\_\_\_

Roll No : \_\_\_\_\_

Class & Sec. - 1-

Section A

Very Short Answer Question

23 Marks

1. Name the living things shown in the pictures,

(A)



(B)



2. Name the non -living things in the pictures.

(A)



(B)



3. Name the plant part given in the image.



4. Which plant is stronger : rose or basil ?

(A)



(B)



Write True/false

5. Teeth help us to see. \_\_\_\_\_

6. Mouth holds all our body parts together. \_\_\_\_\_

7. Living things grow. \_\_\_\_\_



8. Living things give birth to young ones. \_\_\_\_\_
9. Herbs are tall and big plants. \_\_\_\_\_
10. Shrubs are bigger than trees. \_\_\_\_\_
11. A money plant needs support to grow. \_\_\_\_\_
12. Roots make food for the plant. \_\_\_\_\_
13. River water is salty. \_\_\_\_\_
14. Lake water is the main source of water. \_\_\_\_\_

Fill in the blanks using correct words from the brackets.

15. \_\_\_\_\_ are our arms and legs. (Trunk / Limbs)
16. \_\_\_\_\_ is the middle part of the body. (Head / Trunk)
17. \_\_\_\_\_ help us to chew food. (Eyes / Teeth)
18. \_\_\_\_\_ and oceans have large amount of water. (River / Sea)
19. \_\_\_\_\_ is not present in fresh water. (Germs / Salt)
20. \_\_\_\_\_ makes food for the plant. (Stem / Leaf)
21. \_\_\_\_\_ fixes the plant to the ground. (Root / Flower)

---

Section B

Multiple Choice Question

5 Marks

---

22. I am a non-living thing. You wear me on your feet. What am I? [     ]

(A) Shirt



(B) Cap



(C) Spectacles



(D) Shoes





23. I am a non-living thing. You use me to play. What am I? [      ]

(A) Comb



(B) Spoon



(C) Pencil



(D) Bat



24. Choose the living thing from the following : [      ]

(A)



(B)



(C)



(D)



25. Choose the non-living thing from the following : [      ]

(A)



(B)



(C)



(D)



26. I am the main source of water. Who am I? [      ]


(A) Sea



(B) Pond



(C) River



(D) Rain





27. What are trees?

---

---

---

---

---

---

---

---

28. Name two natural sources of water.

---

---

---

29. Name two herbs.

---

---

---

30. Write any two uses of water.

---

---

---

31. Name any two parts of the head.

---

---

---

32. You eat leafy vegetables in your meals. What types of plants are they?

---

---

---

---

---

---

33. Name any two trees.

---

---

---

---

---

---

---

---

---



34. Look at the pictures below. On which one can a tree house be built? Why?



Banyan Tree



Rose Plant

---

---

---

---

---

---

---

---

---



---

Section D

Graphic Organisers

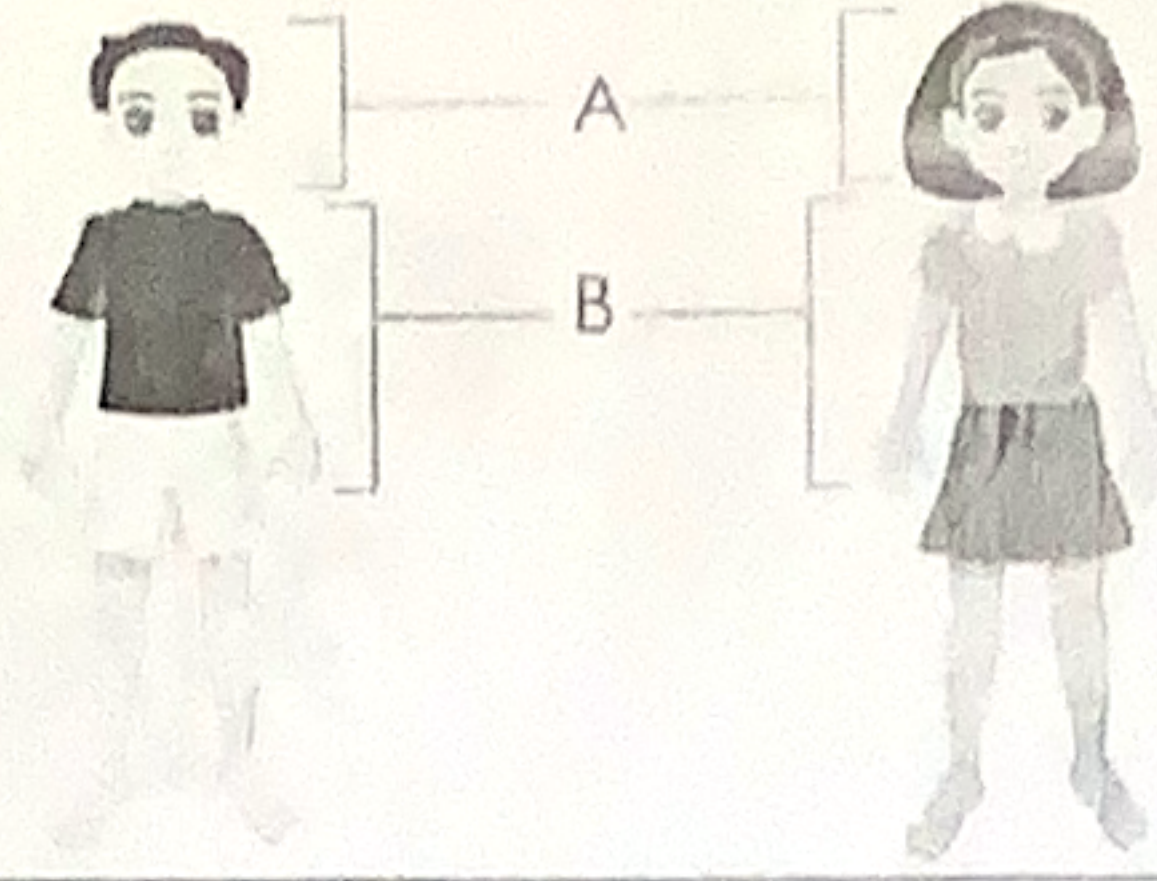
16 Marks

35. Choose the correct words from the brackets and complete the following table (well/sea/ocean/natural/artificial)


Sources of water	
	<p>This is a <input type="text"/> . It is a <input type="text"/></p> <p><input type="text"/> source of water.</p>
	<p>This is a <input type="text"/> . It is an <input type="text"/></p> <p><input type="text"/> source of water.</p>



36. Write the names of the parts of the body labelled as A and B in the given picture.



37. Label the different parts of the plant.



38. Fill in the boxes to complete the names of the body parts

